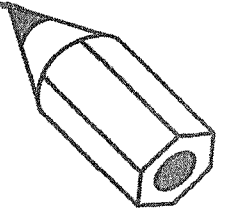


date

class

name


L'heure




Exercise A

Draw the correct time.


1. *Il est une heure et demie.*




4. *Il est dix heures moins dix.*




2. *Il est quatre heures moins le quart.*




5. *Il est minuit.*



3. *Il est midi vingt.*



6. *Il est cinq heures moins vingt-trois.*



Exercise B

Write out the following times in French.

1. 4:30 p.m. _____

2. 3:45 p.m. _____

3. Noon _____

4. 1:10 _____

5. 8:55 a.m. _____

6. 7:30 _____

7. 12:25 a.m. _____

8. 2:18 p.m. _____

9. 6:35 a.m. _____

10. 11:55 p.m. _____